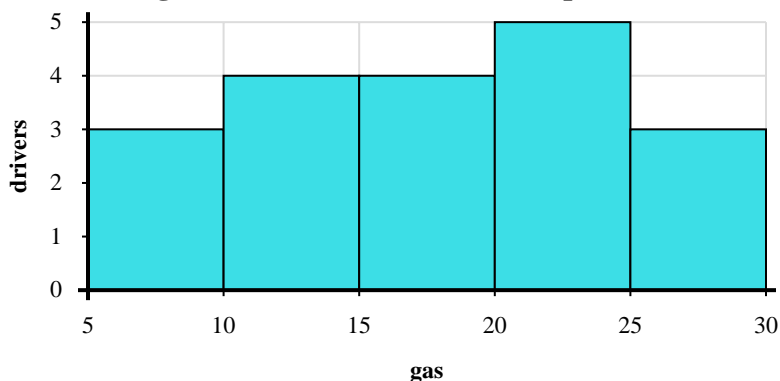
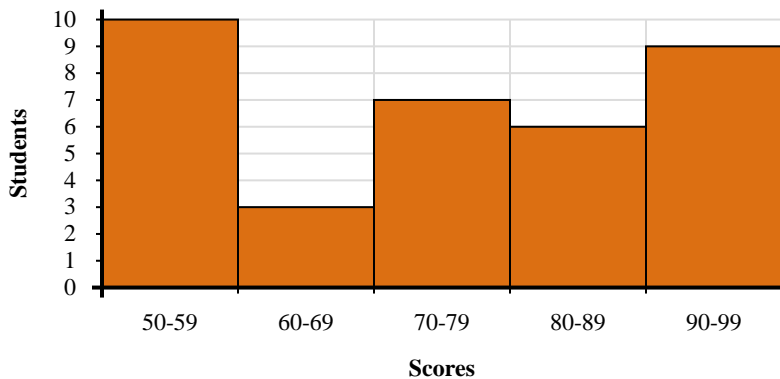




Use the histograms shown to answer each question.



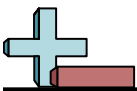
- 1) Most drivers purchased between _____ and _____ gallons.
- 2) How many drivers are represented in this histogram?
- 3) How many drivers purchased between 15 and 20 gallons?
- 4) If a driver purchased 12 gallons which bar would they be added to?



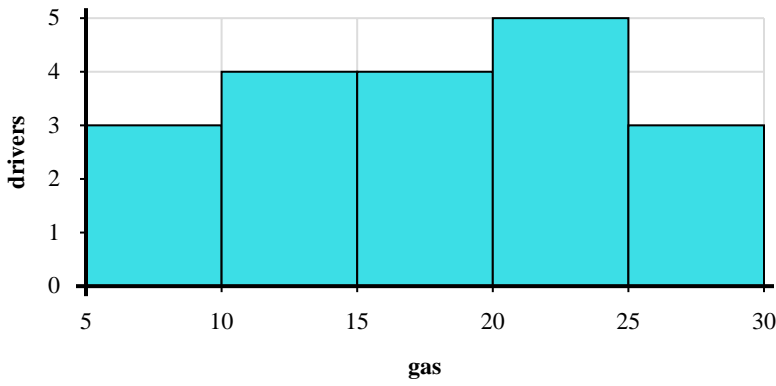
- 5) How many students scored between a 50 and 60?
- 6) How many students are represented in this histogram?
- 7) Most students scored between a _____ and _____.
- 8) If a student scored a 94 which bar would they be added to?

Answers

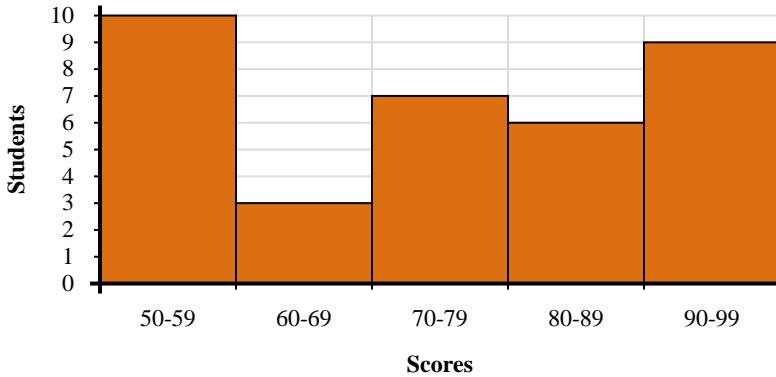
1. _____
2. _____
3. _____
4. _____
5. _____
6. _____
7. _____
8. _____



Use the histograms shown to answer each question.



- Most drivers purchased between _____ and _____ gallons.
- How many drivers are represented in this histogram?
- How many drivers purchased between 15 and 20 gallons?
- If a driver purchased 12 gallons which bar would they be added to?



- How many students scored between a 50 and 60?
- How many students are represented in this histogram?
- Most students scored between a _____ and _____.
- If a student scored a 94 which bar would they be added to?

Answers

- 20 25
- 19
- 4
- 2
- 10
- 35
- 50 60
- 5